



MATH TERMS




Directions


Solve each math problem. Then match the mathematical term on the right that is associated with the circled item on the left. Write the letter on the line.


- _____ 1.
$$\begin{array}{r} 345 \\ -123 \\ \hline \end{array}$$
 



- _____ 2.  $\times 7 = 35$


- _____ 3. $72 \div 8 =$ 


- _____ 4.
$$\begin{array}{r} \text{circled empty oval} \\ + 2,345 \\ \hline 5,889 \end{array}$$

- _____ 5. $22 \times 4 =$ 

- _____ 6. $35 + 43 =$ 

- _____ 7.  = 

- _____ 8.  = $\frac{\text{circled empty oval}}{5}$

- _____ 9.  = $\frac{7}{\text{circled empty oval}}$

A. product

B. sum

C. addend

D. difference

E. factor

F. quotient

G. numerator

H. fraction

I. denominator

MIND-BENDER MATH

